


İLKOKUL DOKÜMANLARI

MATEMATİK ETKİNLİKLERİ

BİRİM KESİRLERİ SIRALAMA



Adı Soyadı : _____

A. Aşağıda verilen kesirleri, birim kesirleri ile numaralandırarak eşleştirelim.

1. $\frac{4}{4}$

2. $\frac{8}{3}$

3. $2\frac{3}{7}$

4. $\frac{9}{5}$

5. $\frac{5}{6}$

$\frac{1}{5}$

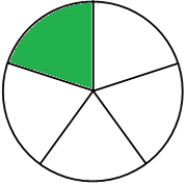
$\frac{1}{7}$

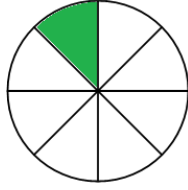
$\frac{1}{6}$

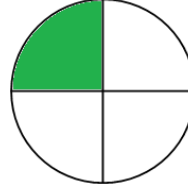
$\frac{1}{4}$

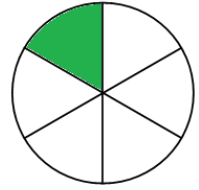
$\frac{1}{3}$

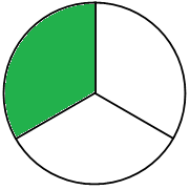
B. Aşağıda modellenen birim kesirleri yazalım. Yazdığımız birim kesirleri sembol kullanarak karşılaştıralım.

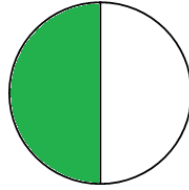


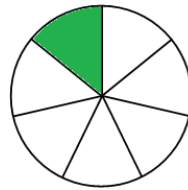


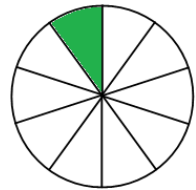












C. Aşağıda verilen kelimeleri kullanarak birim kesirlerin sıralama kuralını yazalım.

büyüktür

diğerlerinden

kesir

olan

küçük

paydası

Birim kesirlerden; _____

D. Aşağıda verilen birim kesirleri sembol kullanarak karşılaştıralım.

$$\frac{1}{3} \quad \frac{1}{6}$$

$$\frac{1}{4} \quad \frac{1}{2}$$

$$\frac{1}{8} \quad \frac{1}{9}$$

$$\frac{1}{7} \quad \frac{1}{6}$$

E. Aşağıda verilen kesirleri sembol kullanarak büyükten küçüğe doğru sıralayalım.

$$\frac{1}{11} \quad \frac{1}{5} \quad \frac{1}{2} \quad \text{—} \quad \text{—} \quad \text{—}$$

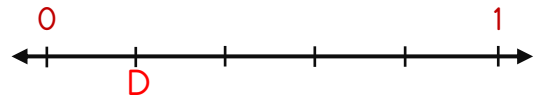
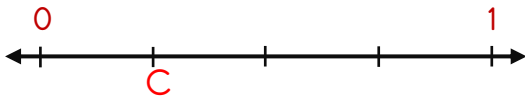

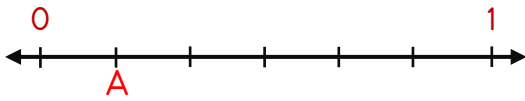
$$\frac{1}{3} \quad \frac{1}{8} \quad \frac{1}{6} \quad \text{—} \quad \text{—} \quad \text{—}$$

F. Aşağıda verilen kesirleri sembol kullanarak küçükten büyüğe doğru sıralayalım.

$$\frac{1}{4} \quad \frac{1}{5} \quad \frac{1}{9} \quad \text{—} \quad \text{—} \quad \text{—}$$

$$\frac{1}{7} \quad \frac{1}{2} \quad \frac{1}{10} \quad \text{—} \quad \text{—} \quad \text{—}$$

G. Aşağıda verilen sayı doğrusu üzerinde harflerle gösterin kesirleri sembol kullanarak büyükten küçüğe doğru sıralayalım.



— — — —

H. Aşağıda verilen kesirlerden büyük ve küçük kesirler yazalım.

$$\frac{1}{3} > \frac{1}{4} > \frac{1}{6}$$

$$\frac{1}{2} < \frac{1}{11} < \frac{1}{5}$$

$$\frac{1}{2} > \frac{1}{7} > \frac{1}{9}$$

$$\frac{1}{2} > \frac{1}{3} > \frac{1}{7}$$

$$\frac{1}{13} < \frac{1}{4} < \frac{1}{5}$$

$$\frac{1}{6} > \frac{1}{8} > \frac{1}{9}$$