


İLKOKUL DOKÜMANLARI

MATEMATİK ETKİNLİKLERİ

KESİR ÇEŞİTLERİ



Adı Soyadı : _____

A. Aşağıda yazılışları verilen kesirlerin okunuşlarını, okunuşları verilen kesirlerin yazılışlarını yazalım.

$\frac{4}{7}$

$\frac{8}{3}$

$2\frac{3}{7}$

$\frac{9}{5}$

Beş bölü sekiz

Dokuz bölü dört

İki tam üç bölü beş

B. Aşağıda verilen kavramlarla tanımları, kavramlar ile kesirleri eşleştirelim.

1. Basit Kesir

1 ya da 1'den fazla bütün ve basit kesirden oluşan kesirlere denir.

$\frac{4}{5}$

2. Bileşik Kesir

Payı, paydasından küçük olan kesirlere denir.


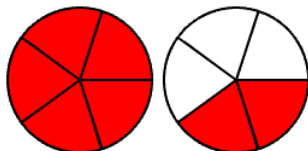
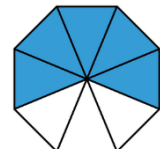

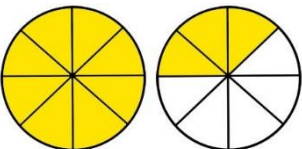
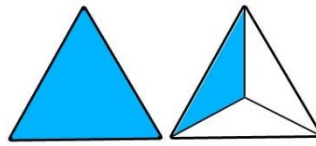
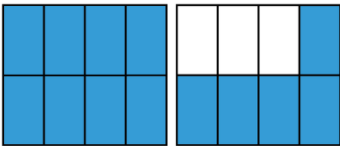
$2\frac{1}{4}$

3. Tam Sayılı Kesir

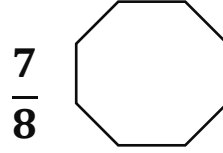
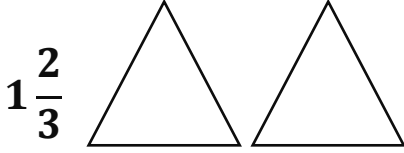
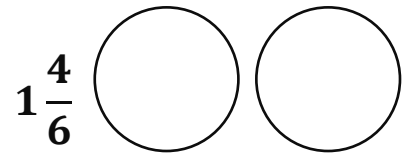
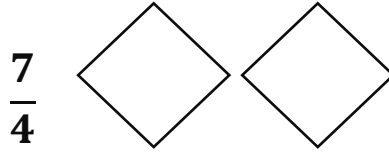
Payı, paydasına eşit ya da payı, paydasından büyük olan kesirlere denir.

$\frac{9}{7}$

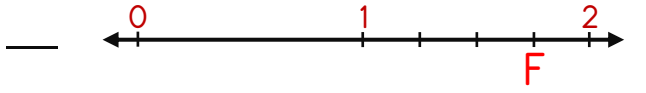
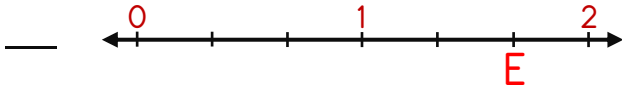
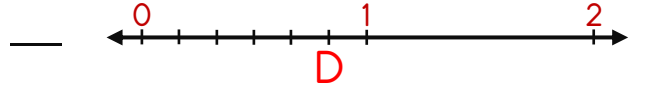
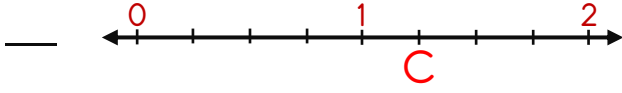
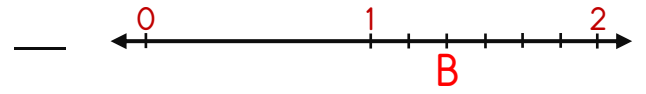
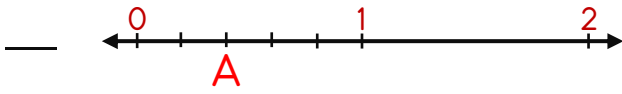
C. Aşağıda modellenen kesirleri yazalım.



D. Aşağıda verilen kesirleri modelleyelim.



E. Aşağıda verilen sayı doğrusu üzerinde harflerle gösterilen kesirleri yazalım.



F. Aşağıda verilen kesirleri sayı doğrusu üzerinde gösterelim.

